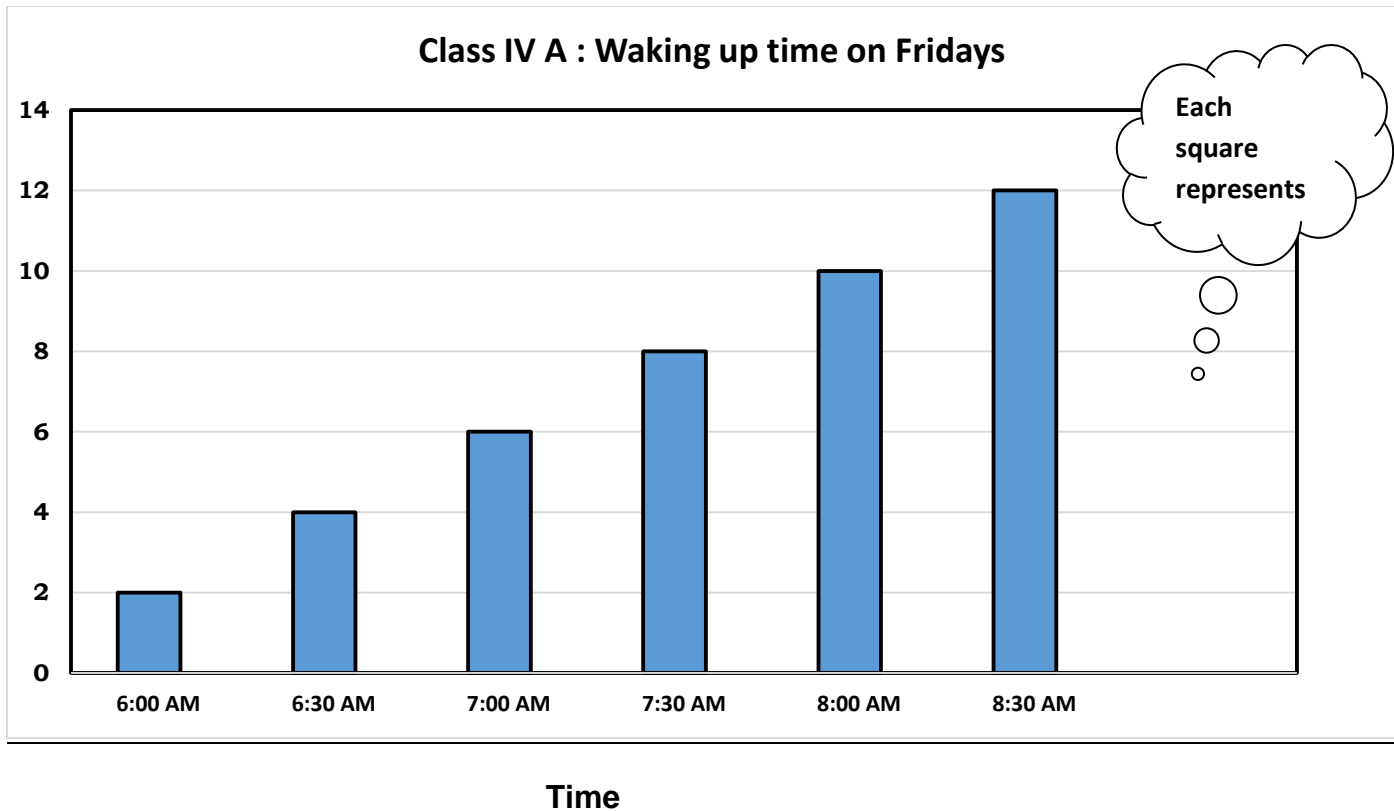


CHAPTER 13 - HANDLING DATA

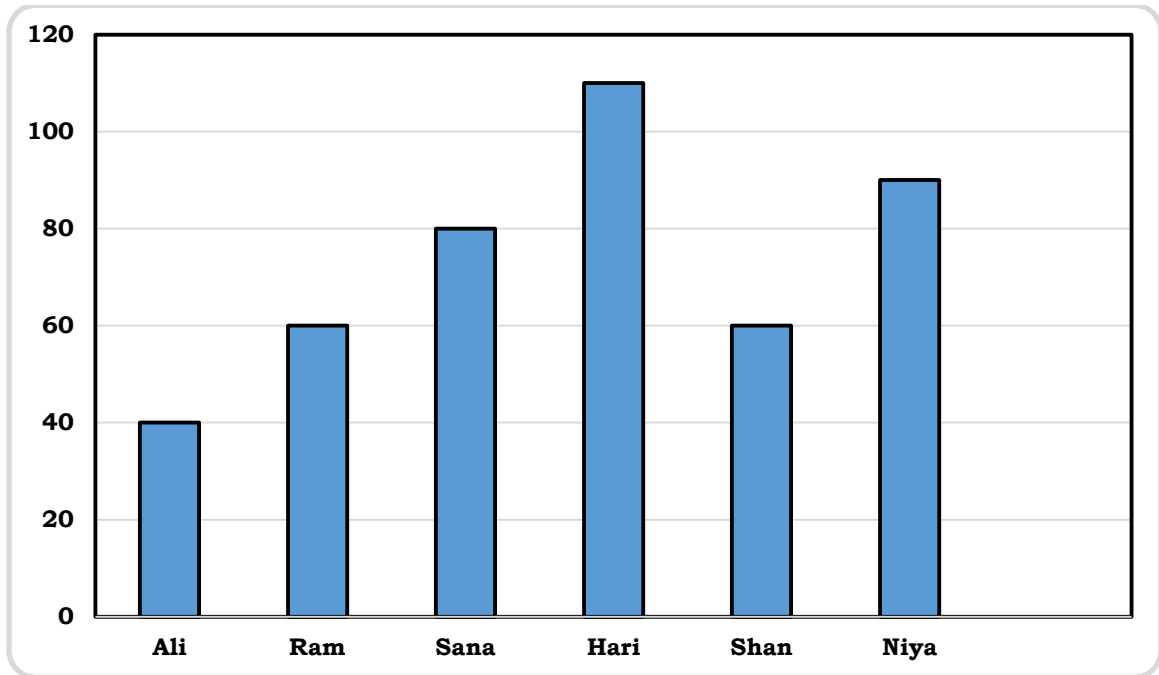
1. This graph shows the waking up time of students in class IV-A on Fridays.



Answer the following questions.

- What is on the vertical scale of the graph?
- What is on the horizontal scale of the graph?
- How many students are there in class IV-A?
- At what time do least students get up?
- How many students get up at 8:30 a.m on Friday ?
- How many students get up during the period 6:00 am to 7:30 am?

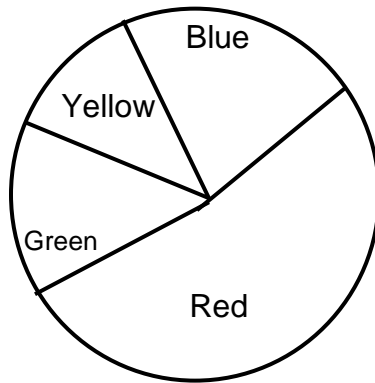
2. The following bar graph shows the total marks(out of 100) obtained by 6 students from a Particular class.



Answer the following questions

- Give the bar graph a title.
- Who is the top scorer?
- How much mark did Ramu get?
- Who got least mark?
- How much more mark Sana scored than Shan?

3. Rita made a circle chart of the favourite colour of children in her class. Look at the circle chart and mark true(T) or false(F).



- a) More children like red than green.
- b) The third most loved colour is blue.
- c) The least favourite colour is yellow.
- d) Less children like blue, green and yellow put together than red

Note : Refer Text book & Note book for more practice

Prepared By : III – V Boys'